




## Self-Assessment Checklist

### Who's Right? Let's Talk It Through

#### REASONING

*Tick the face that best shows how your learning went today.*

*How well did I justify and evaluate the mathematics?*

	 <b>Not yet</b>	 <b>With help</b>	 <b>Did it well</b>
I explained why the same unit (square centimetres) must be used for every face.			
I justified why surface area is measured in square centimetres.			
I tested both claims and decided which answer was reasonable.			
I explained why one student's claim was incorrect.			

**One thing I understand better now about surface area is:**